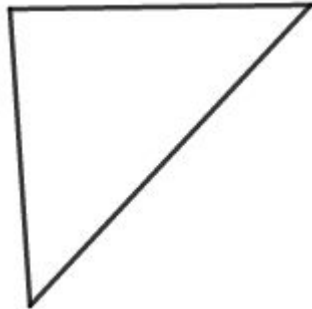
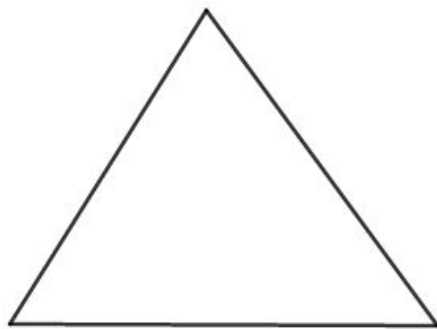


RESOLUÇÃO DA ATIVIDADE DE RAIOS X

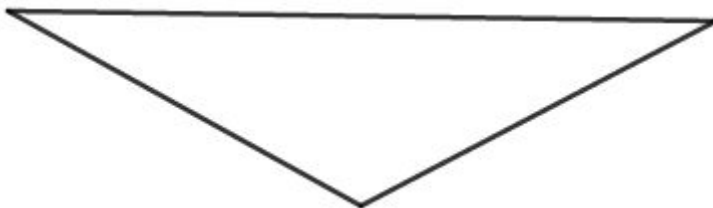
- 1) Usando a régua, meça os lados, anote os valores nos triângulos e classifique-os quanto aos lados. (as medidas dos lados podem variar de acordo com a impressão. Por essa razão não as marcamos nos triângulos)



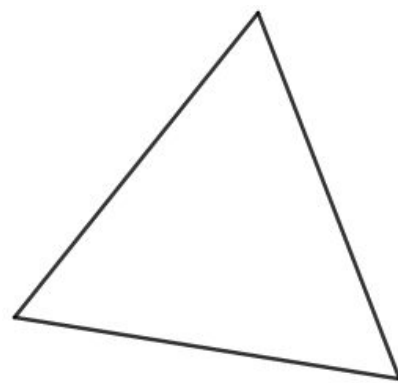
a) isósceles



b) escaleno

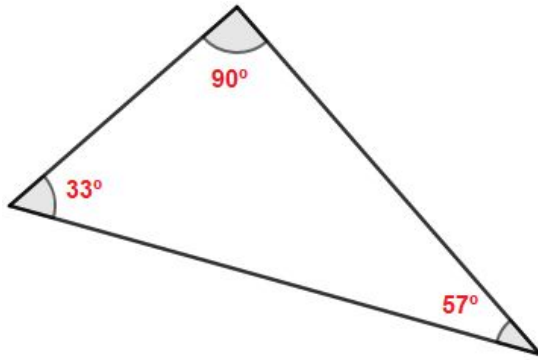


c) isósceles

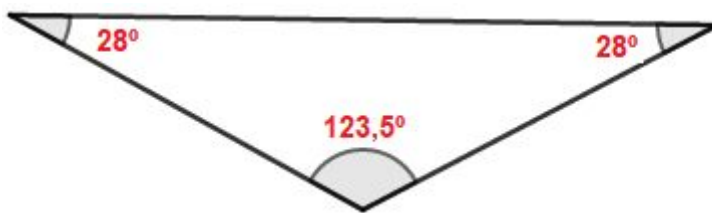


d) equilátero

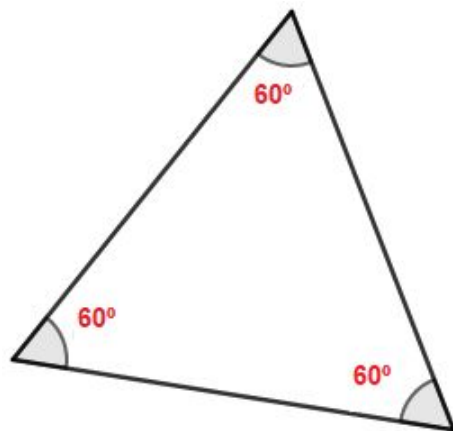
2) Usando o transferidor, meça os ângulos, anote os valores em cada triângulo e classifique-os quanto aos ângulos.



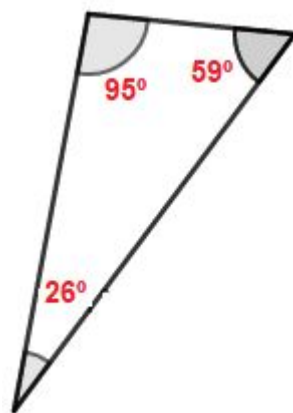
a) retângulo



b) obtusângulo



c) acutângulo



d) obtusângulo