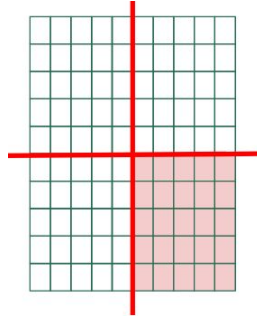


Resolução da atividade principal - MAT6_08NUM01

Em cada item pinte a quantidade que representa fração centesimal e em seguida escreva na forma de porcentagem.

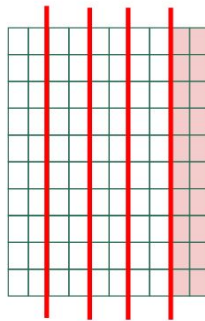
a) $\frac{1}{4}$

$$\frac{1}{4} = \frac{1 \times 25}{4 \times 25} = \frac{25}{100} = 25\%$$



b) $\frac{1}{5}$

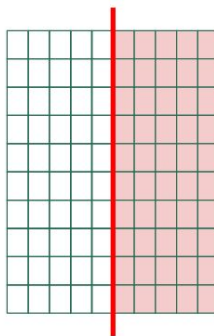
$$\frac{1}{5} = \frac{1 \times 20}{5 \times 20} = \frac{20}{100} = 20\%$$



c) 0,5

$$0,5 = \frac{5}{10} = \frac{1}{2}$$

$$\frac{1}{2} = \frac{1 \times 50}{2 \times 50} = \frac{50}{100} = 50\%$$



d) 0,1

$$0,1 = \frac{1}{10}$$

$$\frac{1}{10} = \frac{1 \times 10}{10 \times 10} = \frac{10}{100} = 10\%$$

