

Qual, ou quais, das figuras a seguir podem ser obtidas a partir da figura ao lado? Em cada caso possível, discuta com os colegas quais movimentos devem ser feitos com a figura original para que ela fique na nova posição.

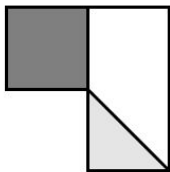
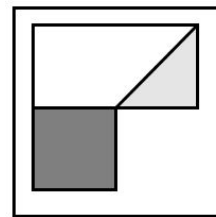


Figura 1

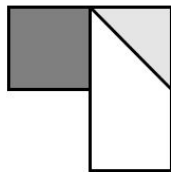


Figura 2

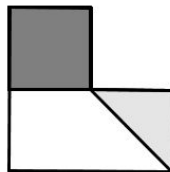


Figura 3

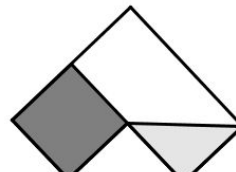


Figura 4

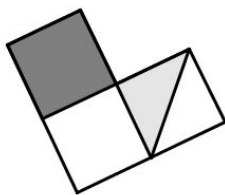


Figura 5

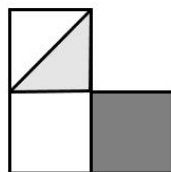


Figura 6

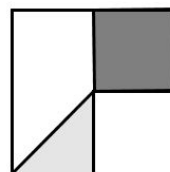


Figura 7

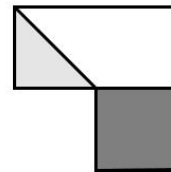


Figura 8

Qual, ou quais, das figuras a seguir podem ser obtidas a partir da figura ao lado? Em cada caso possível, discuta com os colegas quais movimentos devem ser feitos com a figura original para que ela fique na nova posição.

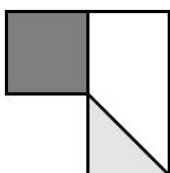
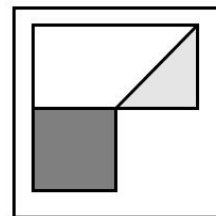


Figura 1

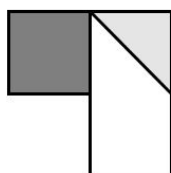


Figura 2

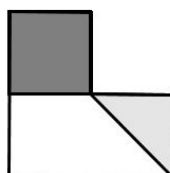


Figura 3

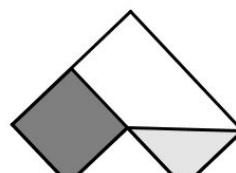


Figura 4

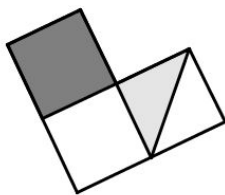


Figura 5

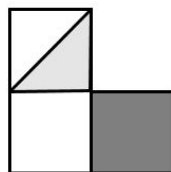


Figura 6

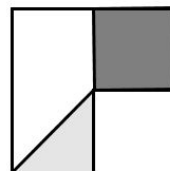


Figura 7

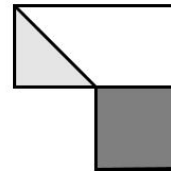


Figura 8