










ATIVIDADE DO RAIOS X - MAT2_17GEO 04



MARIA REUNIU ALGUMAS PEÇAS DE UM JOGO.
QUAL DAS PEÇAS ACIMA NÃO POSSUI VÉRTICES E NEM ARESTAS? MARQUE X.



MARIA REUNIU ALGUMAS PEÇAS DE UM JOGO.
QUAL DAS PEÇAS ACIMA NÃO POSSUI VÉRTICES E NEM ARESTAS? MARQUE X.



MARIA REUNIU ALGUMAS PEÇAS DE UM JOGO.
QUAL DAS PEÇAS ACIMA NÃO POSSUI VÉRTICES E NEM ARESTAS? MARQUE X.