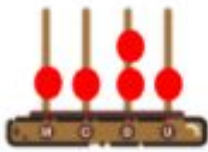
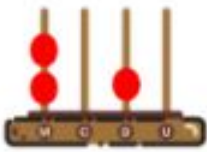
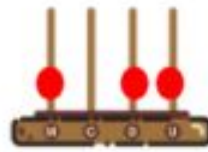
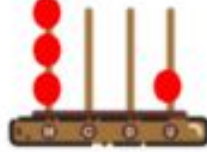
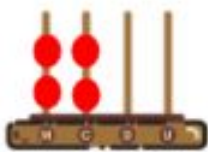

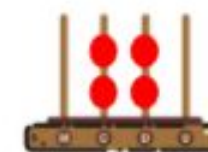



ATIVIDADES COMPLEMENTARES - MAT3_01NUM05

1) ESCREVA COM ALGARISMOS O NÚMERO CORRESPONDENTE PARA AS REPRESENTAÇÕES NOS ÁBACOS ABAIXO E DEPOIS ORDENE-OS EM ORDEM DECRESCENTE.


			
_____	_____	_____	_____
			
_____	_____	_____	_____

ORDENAÇÃO: _____

2) OBSERVE AS REGULARIDADES E COMPLETE AS SEQUÊNCIAS ABAIXO.

- 7 230 - _____ - _____ - 7 260 - 7 270 - _____ - _____ - _____.
- _____ - _____ - _____ - 2 200 - 2300 - 2 400 - _____ - _____.
- 1 000 - _____ - _____ - _____ - 3 000 - 3 500 - _____ - 4 500.

3) **DESAFIO:** QUE TAL RESOLVER O ENIGMA ABAIXO? PENSE E RESPONDA.

	<p>QUAL DESSES NÚMEROS VOCÊ ACHA QUE NÃO FAZ PARTE DO GRUPO? POR QUÊ?</p> <table border="1" data-bbox="566 1780 1332 1859"> <tr> <td>1 320</td> <td>5 421</td> <td>8 623</td> <td>6 078</td> <td>2 920</td> </tr> </table>	1 320	5 421	8 623	6 078	2 920
1 320	5 421	8 623	6 078	2 920		

RESPOSTA: _____