





1) Sabendo que $T + U = 25$, calcule quanto vale $TUT + UTU$

2) Encontre o resultado da última equação:


$$\text{Cow} - \text{Sheep} = 15$$


$$\text{Horse} + \text{Cow} + \text{Cow} = 180$$


$$\text{Horse} + \text{Horse} + \text{Horse} = 270$$


$$\text{Sheep} + \text{Horse} : \text{Cow} = ?$$

Desafio:

3) Descubra o valor de cada letra

$$\begin{array}{r} \text{SUA} \\ +\text{TUA} \\ \hline \text{CASA} \end{array}$$