
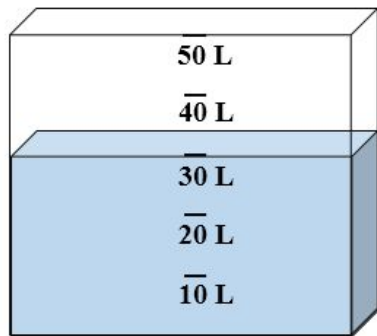



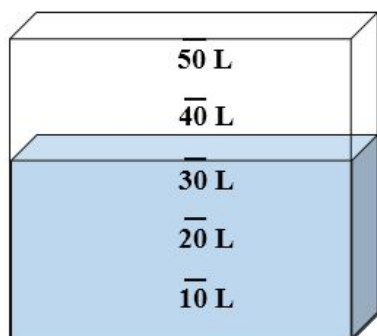
Vou mergulhar esse cubo de isopor, que tem arestas medindo 3 decímetros, dentro desse tanque com água.



O que vai acontecer?

---

Vou mergulhar esse cubo de isopor, que tem arestas medindo 3 decímetros, dentro desse tanque com água.



O que vai acontecer?