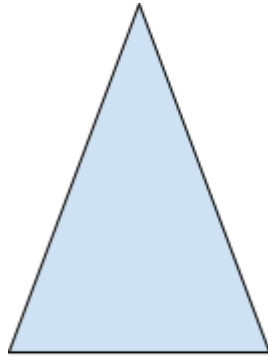
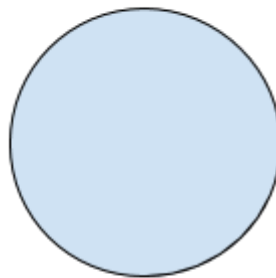


## Resolução Atividade Complementar - MAT9\_17GEO02


- 1) Abaixo está um sólido geométrico, que pode ser analisado sob diferentes vistas. Represente geometricamente suas as vistas frontal e inferior:



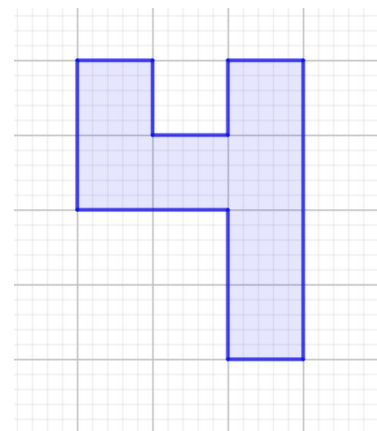
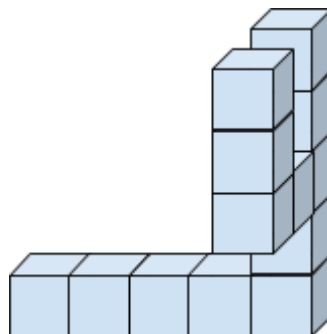
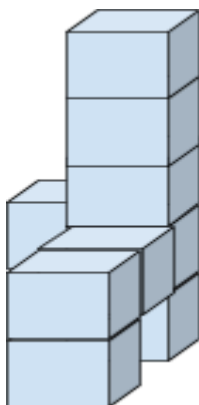
Vista frontal



Vista inferior



- 2) Represente dois sólidos geométricos que obtenham a vista lateral abaixo:



3) [Desafio] As figuras geométricas abaixo são vistas de um único sólido geométrico, represente na malha quadriculada este sólido:

