




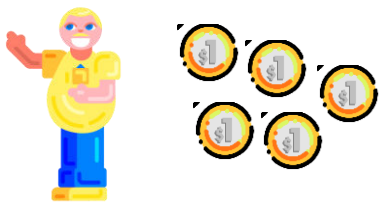
1) PEDRO E LÚCIA VÃO FAZER UM TRABALHO DE ARTES EM GRUPO. VEJAM QUANTOS GIZES DE CERA QUE CADA UM TEM. QUANTOS GIZES TÊM, JUNTOS, PARA FAZER O TRABALHO DE ARTES?



PEDRO



LÚCIA



---

2) MANOEL E JOAQUIM ESTÃO JUNTANDO DINHEIRO PARA COMPRAR UM PRESENTE NO NATAL. VEJA QUANTO CADA UM TEM.

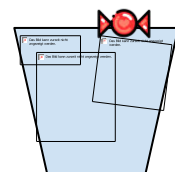

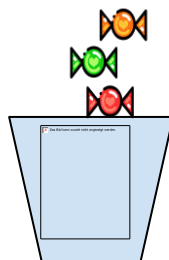

MANOEL

JOAQUIM

QUANTO ELES TÊM JUNTOS?

---

3) **[DESAFIO]** MARIA ESTÁ MONTANDO COPOS COM BALAS. CADA COPO DEVE TER 8 BALAS. TODOS OS COPOS JÁ TEM 8 BALAS?



MARIA

REGISTRE A QUANTIDADE DE BALAS DE CADA COPO.