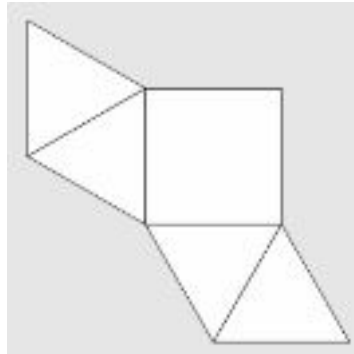


Atividade Complementar 1

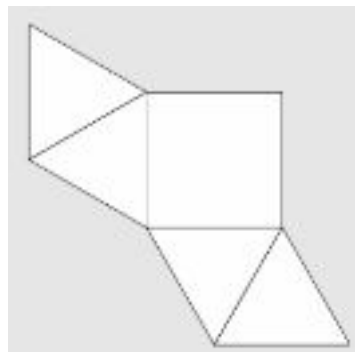
DESAFIO

A planificação abaixo representa qual poliedro?



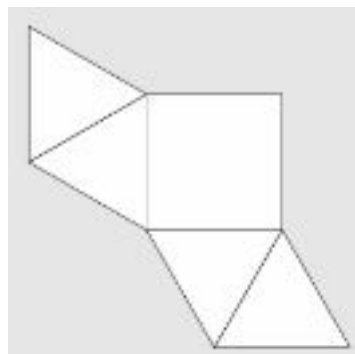
DESAFIO

A planificação abaixo representa qual poliedro?



DESAFIO

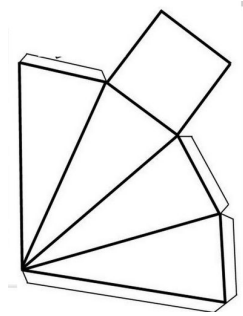
A planificação abaixo representa qual poliedro?



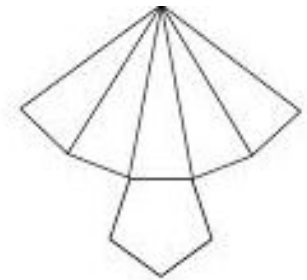
Atividade Complementar 2

Relacione o nome do poliedro a sua planificação.

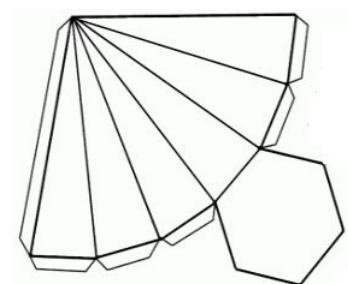
(1) PIRÂMIDE DE BASE TRIANGULAR ()



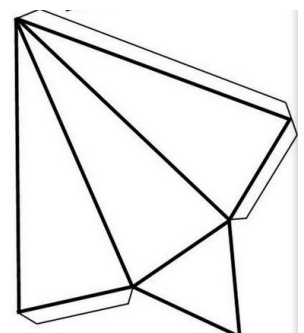
(2) PIRÂMIDE DE BASE HEXAGONAL ()



(3) PIRÂMIDE DE BASE QUADRADA ()

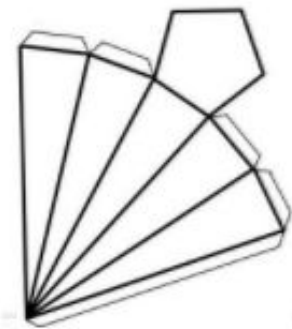
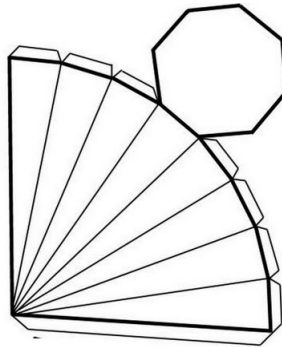
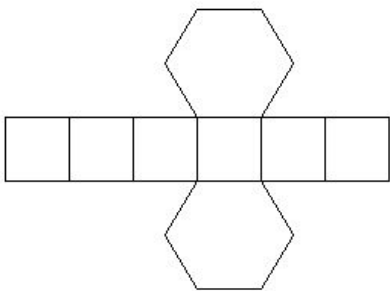
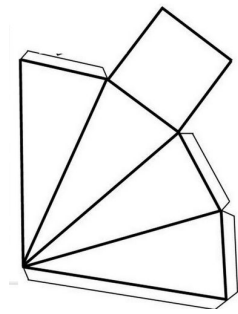
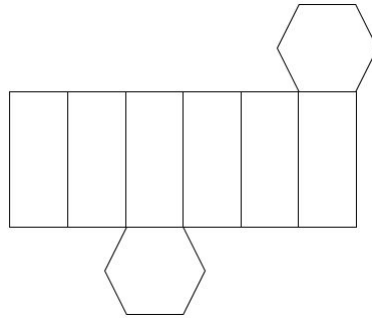
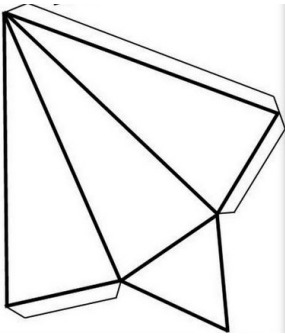


(4) PIRÂMIDE DE BASE PENTAGONAL ()



Atividade Complementar 3

Pinte apenas as planificações que representem prismas.



Pinte apenas as planificações que representem prismas.

