


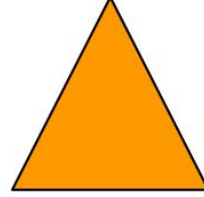



ATIVIDADE RAIO X - MAT1_09GEO04

RECORTE O NOME E A CARACTERÍSTICA DE CADA UMA DESTAS FIGURAS GEOMÉTRICAS PLANAS E COLE NO ESPAÇO CORRESPONDENTE.



TRIÂNGULO

QUADRADO

RETÂNGULO

QUATRO
LADOS
IGUAIS

DOIS
PARES
DE
LADOS
IGUAIS

TRÊS
LADOS