
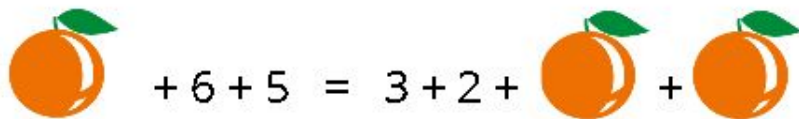


## Raio X - MAT4\_16ALG01

---




Na situação acima, um hambúrguer equivale a quantos refrigerantes?

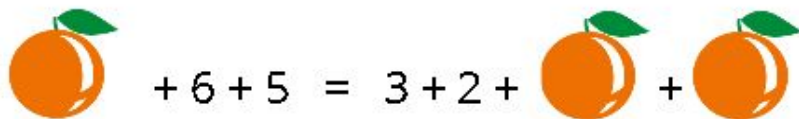


Na situação acima, a quanto equivale uma laranja?

---




Na situação acima, um hambúrguer equivale a quantos refrigerantes?

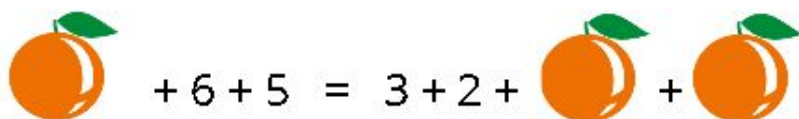


Na situação acima, a quanto equivale uma laranja?

---



Na situação acima, um hambúrguer equivale a quantos refrigerantes?



Na situação acima, a quanto equivale uma laranja?

---