
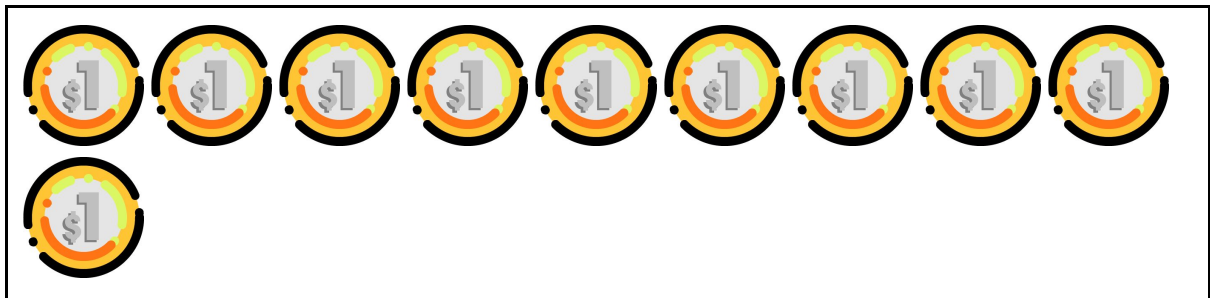
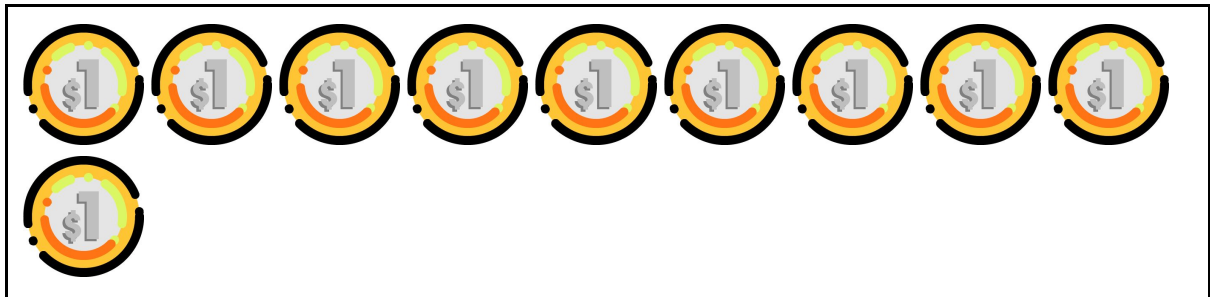


Resolução das atividades complementares MAT1_16GRM06

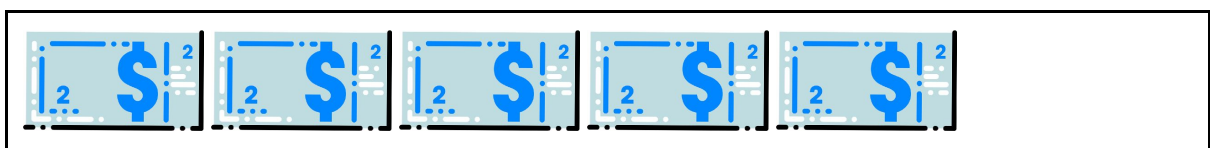
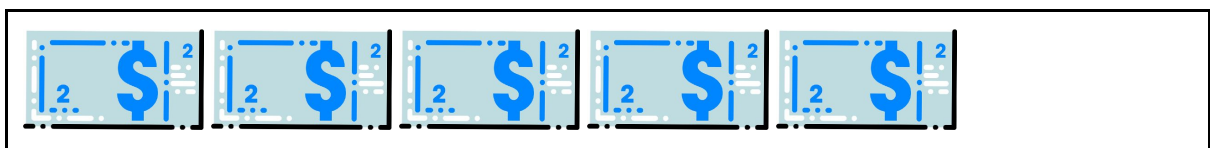
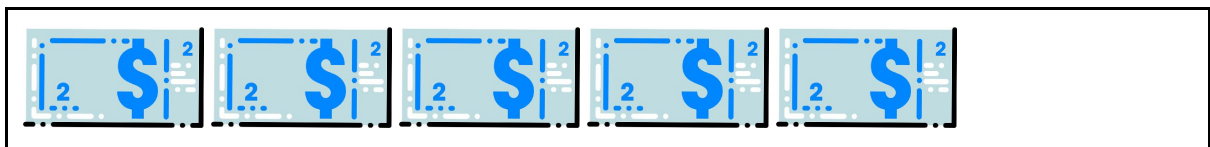
- 1) CONTE OS VALORES DOS QUADROS EM MONTANTES DE R\$ 10,00 E ASSINALE OS VALORES TOTAIS DOS QUADROS



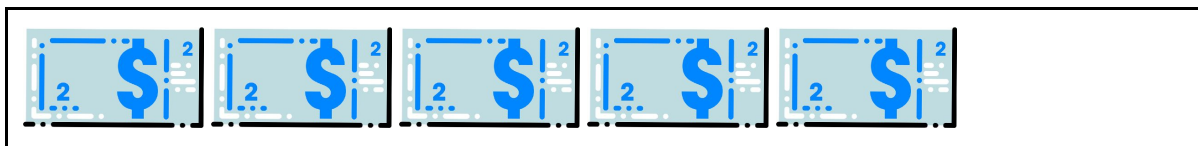
() R\$ 20,00

(**X**) R\$ 30,00

() R\$ 40,00



Resolução das atividades complementares MAT1_16GRM06



() R\$ 20,00

() R\$ 30,00

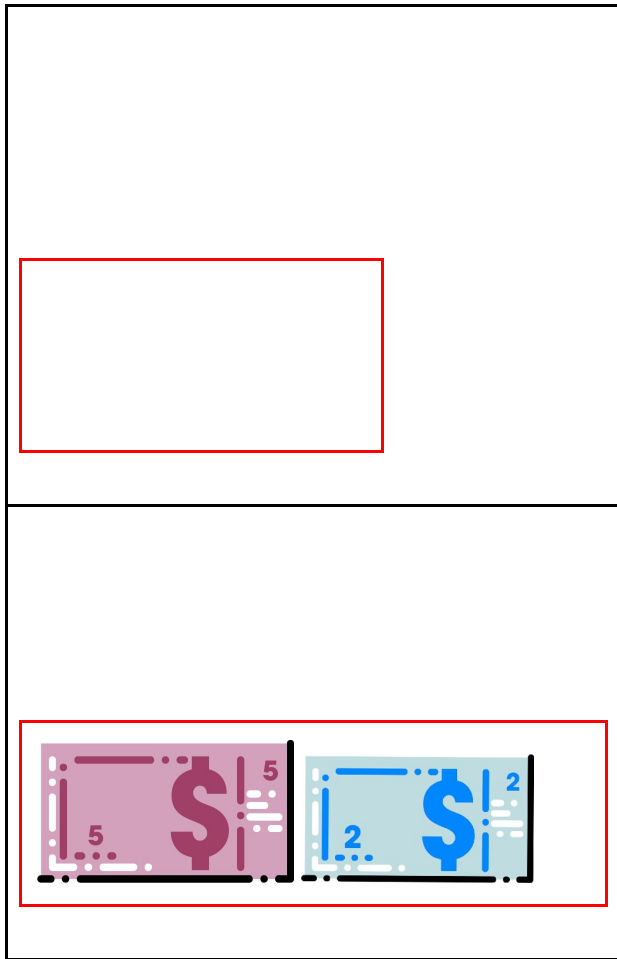
(**X**) R\$ 40,00

2) OBSERVE OS VALORES E RETIRE SOMENTE O NECESSÁRIO PARA DEIXAR R\$ 10,00

The image shows a collection of banknotes and coins. At the top, there are two purple 5 Real banknotes. Below them, one purple 5 Real banknote is highlighted with a red border. In the middle section, there are two blue 2 Real banknotes, one blue 2 Real banknote, and four yellow 1 Real coins. At the bottom, two yellow 1 Real coins are highlighted with a red border. Below the highlighted coins, the text "OU UMA CÉDULA DE DOIS REAIS" is written.

OU UMA CÉDULA DE DOIS REAIS

Resolução das atividades complementares MAT1_16GRM06



3. DESAFIO:

OBSERVE OS PRODUTOS E SEUS VALORES. ORGANIZE-OS FORMANDO DOIS GRUPOS CUJO TOTAL SEJA DE R\$ 10,00 SEM REPETIR OS PRODUTOS. UTILIZE O DINHEIRINHO DO SEU ENVELOPE PARA AJUDAR A COMPOR OS VALORES.

R\$ 2,00 R\$ 3,00 R\$ 4,20 R\$ 5,00 R\$ 2,60

Resolução das atividades complementares MAT1_16GRM06

R\$ 2,50

R\$ 2,00

R\$ 7,00

R\$ 1,00

GRUPO 1

R\$ 2,00

R\$ 3,00

R\$ 5,00

GRUPO 2

R\$ 2,00

R\$ 7,00

R\$ 1,00