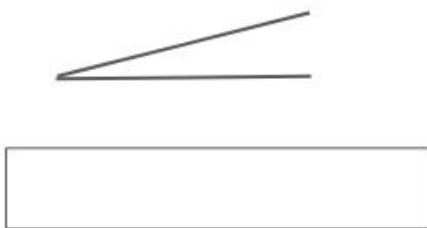
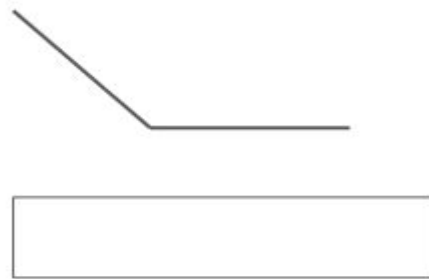
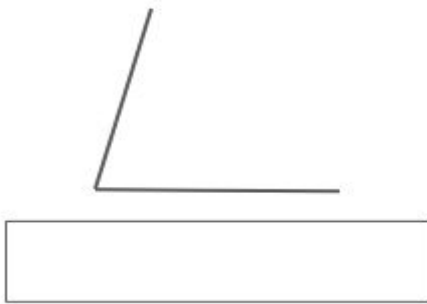


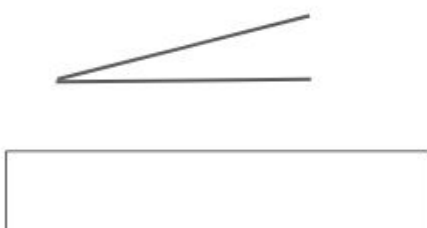
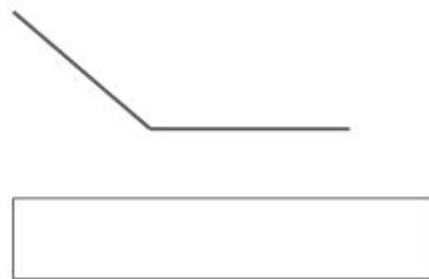
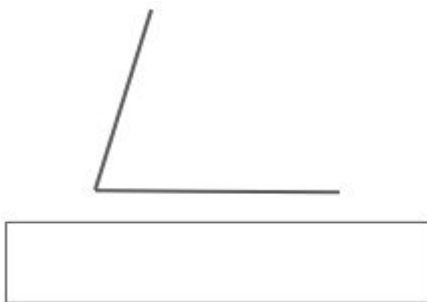
Nas figuras a seguir existem segmentos delimitando ângulos. Para os ângulos que você julgar retos escreva  $= 90^\circ$ ; para os ângulos agudos escreva  $< 90^\circ$  e para os ângulos obtusos escreva  $> 90^\circ$ .



nova  
escola

---

Nas figuras a seguir existem segmentos delimitando ângulos. Para os ângulos que você julgar retos escreva  $= 90^\circ$ ; para os ângulos agudos escreva  $< 90^\circ$  e para os ângulos obtusos escreva  $> 90^\circ$ .



nova  
escola