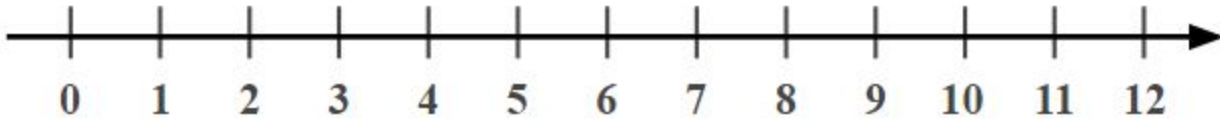


## Atividade Aquecimento - MAT6\_07NUM02

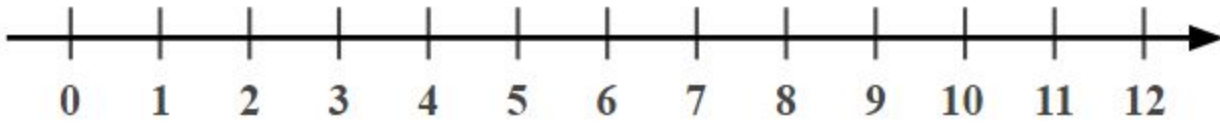
Localize os números na reta numerada:

A = 12      B = 3      C = 8      D = 1      E = 11



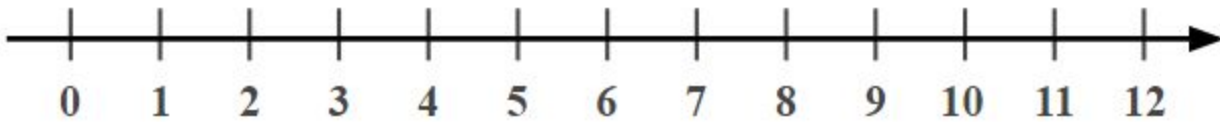
Localize os números na reta numérica:

A = 12      B = 3      C = 8      D = 1      E = 11



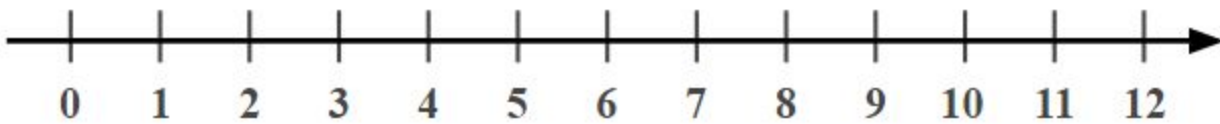
Localize os números na reta numérica:

A = 12      B = 3      C = 8      D = 1      E = 11



Localize os números na reta numérica:

A = 12      B = 3      C = 8      D = 1      E = 11



Localize os números na reta numérica:

A = 12      B = 3      C = 8      D = 1      E = 11

