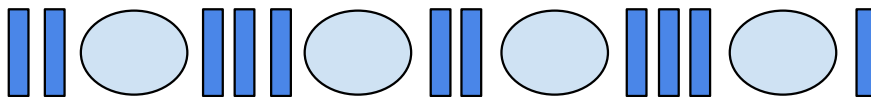
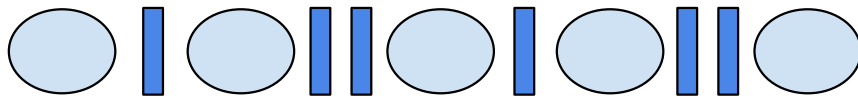
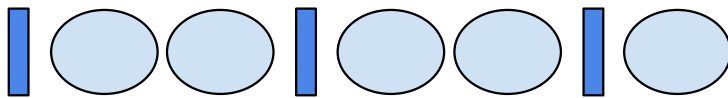
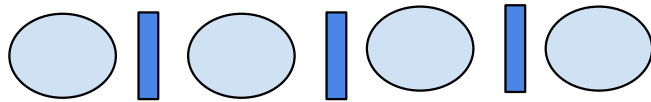










## Atividade complementar - MAT1\_06ALG03

1) DÊ CONTINUIDADE AS SEQUÊNCIAS ABAIXO, DESENHANDO OS PRÓXIMOS ELEMENTOS. VOCÊ DEVE REPETIR O PADRÃO POR MAIS TRÊS VEZES.



2) LIGUE CADA PADRÃO A SUA SEQUÊNCIA CORRESPONDENTE.



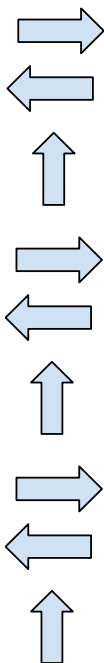
**[DESAFIO]** OBSERVE, IDENTIFIQUE O PADRÃO E CONTE QUANTAS VEZES O PADRÃO SE REPETE EM CADA SEQUÊNCIA E REGISTRE ESSE NÚMERO NA LINHA ABAIXO DE CADA UMA.

**A**



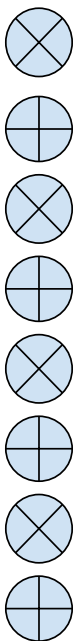
\_\_\_\_\_

**B**



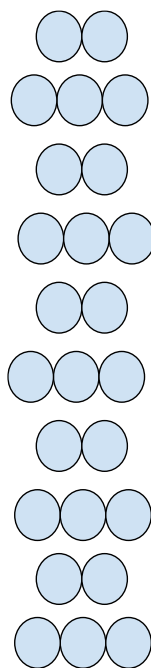
\_\_\_\_\_

**C**



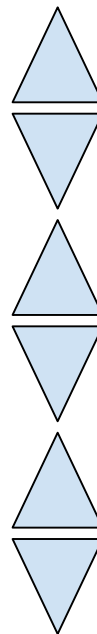
\_\_\_\_\_

**D**



\_\_\_\_\_

**E**



\_\_\_\_\_